

Winter break Home Work

Class – 1

Subject	Home work
English	1) Read one page daily. 2) Make 5 flash cards each of fruits and vegetables. 3) Learn :- opposite words , rhyming words , one- many and new words
EVS	EVS • Make a model / cutout of your favourite fruit/ vegetable and write 10 lines about it.

Hindi	<ol style="list-style-type: none">1 सभी मात्राओं के 10-10 शब्द लिखो।2 कोई एक कहानी या कविता पढ़ते हुए वीडियो बनाओ।3 दादा दादी कविता याद करो।4 इकाई 1 (परिवार) रिवाइज करें।
Math	<ol style="list-style-type: none">1) Learn tables 2 to 5 .2) Practice sums of addition and subtraction.

Class – 2

Subject	Home work
English	<p>1 Revise unit 4</p> <p>2 Write 10 pairs of homophones similar pronunciation but different spellings</p> <p>3 Write 10 describing words</p> <p>4 Learn any poem on birds</p>
Hindi	<p>सभी मात्राओंके 10-10 शब्द लि खो।</p> <p>कोई एक कहानी या कवि ता पढ़तेहुए वीडि यो बनाओ।</p> <p>कि सान कवि ता याद करो।</p> <p>पेज नबं र 60 पर दी हुई परि योजना कार्य परू करै।</p>

	<p>काँपी मेंकरवाया हुआ सारा काम रि वाइज करे</p>
EVS	<p>1 Paste the picture of different types of plants in your notebook</p> <p>2 Plant any three herbs in your garden and take care of them.</p> <p>3 Revise chapter the World of Plants for cycle test.</p>
Math	<p>1 Do 20 sums of addition and 20 sums of subtraction with carrying and borrowing</p> <p>2 Learn and write tables from 2 to 12</p> <p>3 Write numbers from 501 to 999</p> <p>4 Do project on page number 82 in maths book.</p>

	5 Revise chapter decoration for festival and Rani is gift
--	--

Class – 3

Subject	Home work
English	<p>Read one page of your book daily . Learn and practice five new words of your textbook daily . Write a few lines on the given topics</p> <p>(atleast five) My train journey Postman My best friend Letter writing ____ To a friend or grandfather thanking him /her for the birthday gift . Select any picture of a garden scene and paste , and write atleast 7 lines on that given picture Make sentences from the given words Train</p>

	Letter Road Holidays Winter Festival
Hindi	<p>(1) पाठ बंदर बाँट से जब मुझे सांप ने काटा तक ककरा गरा कार्य राद कीजिए ।</p> <p>(2) पाँच सुलेख ।</p> <p>(3) वचन बदलो । (20 शब्द)</p> <p>(4) ललंग बदलो । (20 शब्द)</p> <p>(5) ववलोम शब्द । (20 शब्द)</p> <p>(6) ककन्ी दस वाक्रों में से ववशेषण शब्द छाँटकर ललखो ।</p>

रचनात्मक लेखन

(1) गाँधी जी के बारे में पाँच पंजक्त्र्ाँ ललखो ।

(2) अपनी आदतों के बारे में पाँच वाक् ललखो ।

(3) “बाघ” पर कोई पाँच पंजक्त्र्ाँ ललखो ।

Math

by multiplying the numbers:

8	6	9
0	5	4

X	7	9	2
7			
6			
3			

b) _____ x 100 = 1700

d) $9 \times 300 =$ _____

f) $10 \times 900 =$ _____

h) $700 \times 10 =$ _____

Do as directed →

(a) $5 + 5 + 5 + 5 = 5 \times 4 = 20$

(b) $2 + 2 + 2 + 2 + 2 = \underline{\hspace{2cm}} = \underline{\hspace{2cm}}$

(c) $7 + 7 + 7 + 7 + 7 + 7 = \underline{\hspace{2cm}} = \underline{\hspace{2cm}}$

(d) $9 + 9 + 9 = \underline{\hspace{2cm}} = \underline{\hspace{2cm}}$

(e) $1 + 1 + 1 + 1 + 1 + 1 + 1 = \underline{\hspace{2cm}} = \underline{\hspace{2cm}}$

(f) $8 + 8 + 8 + 8 = \underline{\hspace{2cm}} = \underline{\hspace{2cm}}$

- Fill in the table by writing repeated addition and multiplication for

In words	Repeated addition	Multiplication
(a) 5 times 2	$2 + 2 + 2 + 2 + 2$	2×5
(b) 6 times 4		
(c) 4 times 6		
(d) 6 times 3		


Q. Fill in the blanks:-

(a) $\frac{1}{2}$ L = _____ ml (b) 1200 ml = _____ L _____ ml

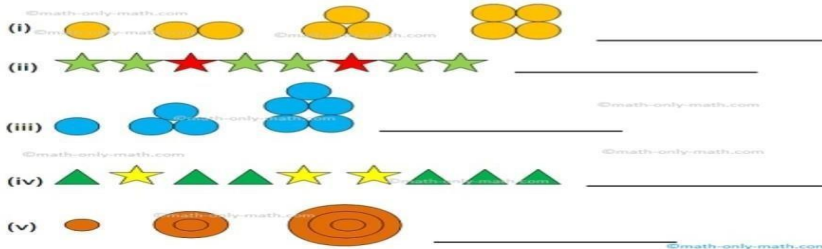
(c) 8L 200 ml = _____ ml (d) 3400 ml = _____ L _____ ml

(e) 2500 ml = _____ L _____ ml

● Complete the pattern:



● Draw the next to complete the pattern.



● Arrange these names in alphabetical order and number these names in the box:

- | | | | |
|--------|----------------------|--------|----------------------|
| Mohan | <input type="text"/> | Shilpa | <input type="text"/> |
| Lila | <input type="text"/> | Nandu | <input type="text"/> |
| Chitra | <input type="text"/> | Pawan | <input type="text"/> |
| Venu | <input type="text"/> | Ahmed | <input type="text"/> |
| | <input type="text"/> | | <input type="text"/> |

2. What will be the time ?

- a. 1 hour after 10:30 _____ b. 15 minutes after 3:30 _____
c. 10 minutes before 1:20 _____ d. 20 minutes before 5:00 _____
e. 30 minutes after _____

3. Rewrite using '+' sign. One has been done for you.

(a) $8 \times 6 = \underline{8 + 8 + 8 + 8 + 8 + 8} = 48$

(b) $5 \times 4 = \underline{\hspace{2cm}} = \underline{\hspace{1cm}}$

(c) $6 \times 5 = \underline{\hspace{2cm}} = \underline{\hspace{1cm}}$

(b) $7 \times 3 = \underline{\hspace{2cm}} = \underline{\hspace{1cm}}$

(b) $9 \times 7 = \underline{\hspace{2cm}} = \underline{\hspace{1cm}}$

EVS

- 1. Write a letter to your friend living in another city to wish him/her on a post card.**
- 2. Paste/draw the pictures of any five animals of your choice and write the food items they eat.**
- 3. Besides drinking how is water used in your house. Draw or paste pictures to show.**
- 4. Take a piece of cloth, decorate it with mirrors , laces etc. and paste on A4 sheet.**

Class – 4

Subject	Home work
English	<p>1- Write 10 words each using suffix- a) ly b) ness c) ity d) ty</p> <p>2 -Write five lines on a)'My Favourite Game' b) My hobby</p> <p>3- Revise Unit 5 to Unit 7 .</p> <p>4- Write 10 Pages of English Handwriting.</p> <p>5-Write any 10 Action words and make sentence using them.</p>

Hindi

१ दान का हिसाब

२ कौन

३ स्वतंत्रता की और

४ थप्प रोटी थप्प दाल

५ पढ़कू की सूझ

उपर दिए गए पाठ्यक्रम के प्रश्न उत्तर याद करें ।

रचनात्मक लेखन

१ जरूरी काम के लिए छूटी हेतु पार्थना पत्र। (याद करो)

२ महात्मा गांधी जी पर वाक्य बनाएं। (याद करो)

३ स्वतंत्रता दिवस पर वाक्य बनाएं। (याद करौं)

४ एक सकारात्मक समाचार को समाचार पत्र से छांटे एवम उसको काटकर अपनी कॉपी में चिपकाएं ।

Math	<ol style="list-style-type: none">1. Make a measurement chart (lt/ml) on A4 sheet.2. Make a short video (1 to 2 minutes) to explain some mathematical shape like cube, cuboid etc.)3. Thorough Revise chapter in rough note book 7, 8, 9, 10 and 11 for PT-24. Learn table 2 to 12
EVS	<p>Do complete holiday home work on A4 sheet.</p> <ol style="list-style-type: none">1 Visit any nearby park/garden and write ten lines about its beauty.2. Make a poster to save trees.

3. Write 5 lines about your own experience of celebrating and eating together

on any occasion. (Occasion, people joined, Who cooked and served the food

there.etc)


4. Draw currency notes of 5 different countries. (Given on page no 198 of your

book)

5. Collect 10 spices from your kitchen and paste them on A4 sheet and write

their names. 6. Learn chapter 12 to 17 for PT2

Class –5

Subject	Home work
English	<p>HHW ENGLISH CLASS 5</p> <p>1.WRITE ten sentences about the following picture</p>  <p>2 Write a paragraph about My best friend</p>

Topsy turvy land

3. Write 10 Proverbs.

4. Write a notice about

A watch you found in the playground

Christmas celebrations in the school

A football match

A library committee

5. Learn the new words and their meanings (units 5,6,7)

6. Revise the syllabus for PT2.

Hindi

(1) पाठ क्रमांक 09 से 15 तक किया गया कार्य याद कीजिए ।

(2) पाँच सुलेख ।

(3) वचन बदलो । (20 शब्द)

(4) लिंग बदलो । (20 शब्द)

(5) पर्यायवाची । (20 शब्द)

(6) कोई 15 मुहावरे ।

(7) विलोम शब्द । (20 शब्द)

रचनात्मक लेखन

(1) “ स्वामी की दादी “ पाठ के आधार पर स्वामी के बारे में लिखो ।

(2) “ पुस्तकों से लाभ “ विषय पर कम से कम 100 शब्दों में लिखो ।

(3) महात्मा गांधी जी के बारे में लिखो ।

	<p>(4) झूठ क्यों नहीं बोलना चाहिए ? झूठ बोलने से क्या नुकसान होता है ?</p>
Math	<p>Make a short video of 1 to 2 minutes to explain perimeter and area of any real object and also explain the concept how to use it in daily life</p> <p>2.Prepare a bill of at least 10 object on A4 sheet.</p> <p>3. Learn table 2 to 20 .</p> <p>4.Revise chapter that will come in</p> <p>Do Worksheets sent in pdf.</p>

EVS

Q1. Tick the correct answers.

i) We study about forts, kingdoms, emperors etc

a) History b) EVS c) Both

ii) A place where old items are displayed

a) Library b) Museum c) Laboratories

iii) What is the capital of Telangana?

a) Amrawati b) Hyderabad c) Chennai

iv) Why were big holes made in the bastions?

a) To attack the enemy b) To get fresh air c) To enjoy the scenery

v) Which metal was used to form the cannon?

a) Silver b) Iron c) Bronze

Q2. Use the clues to guess, encircle and write the words related to Golconda

fort:

1. A part of wall coming out in round shape. _____

2. It used to be full of water. _____

3. A group of soldiers. _____

4. A single of this can cause a lot of destruction.

5. A place where old items are displayed.

Q. 3 Choose the correct answer to fill in the blanks.

(Cannon, Hyderabad, ditch, gate, carvings, thick, nuclear)

a) The walls of the Golconda fort are very _____

b) It had a very heavy _____.

c) The walls of the fort have beautiful _____.

d) There is a large deep _____ along the thick walls of the fort.

e) _____ bombs cause a lot of destruction.

4. Which of the following countries is situated on the lower part of the globe?

(a) England (b) Brazil (c) Germany (d) USA

5. Which of the following are in space?

(a) Stars (b) Moon (c) Sun (d) All of these

6. Which of the following festivals is related to the moon?

(a) Guru Purnima (b) Dusshera (c) Eid (d) Christmas

Q 7] Write the full form of the following abbreviations.

ISRO

.....

.

8. Answer the following questions.

1) Write down what is blue, green, yellow and brown parts shows in globe?

2) Who is Sunita Williams?

9. The earth pulls everything towards itself? Why?

10. Is a space ship carry astronauts in to the space?

11. The sea water doesn't fall off. Give reason.

Q. Tick the right answers

a) Which mode of transport does not cause pollution?

i) Cycle ii) bus iii) truck iv) car

b) Which gas is used for cooking?

i) CNG ii) LPG iii) Nitrogen iv) Carbon dioxide

c) Tick the vehicle you commonly see on the road

i) Aero plane ii) Submarine iii) car iv) Helicopter

d) Tick the product which we cannot obtain from petroleum.

i) Diesel ii) petrol iii) LPG iv) Solar Energy

Which of the vehicles do you think give smoke

a. Bus b. Bullock cart c. Bicycle d.Tonga

Q . Where in India can we find oil fields

a.Rajasthan b.Maharashtra c. Jammu and

Kashmir

d.Madhya

Pradesh

Q . Where all oil is used?

a. Oil is used for all agricultural purposes

b. Oil is used for running vehicles, drycleaning clothes, for generating

electricity, making paints and plastics and cooking food as kerosene

c. Oil is used as manure for plants.

d. Oil is used as food for plants.

Q Answer in one word.

[i] A place at a height of 5000 metres where Changpa live.

[ii] A place where Changpa keep their animals. _____

[iii] A place famous for house boats. _____

[iv] A place where the highest roads in India are located.

Fill in the blanks:

[i] As we go up in the mountains the level of oxygen in the air

_____.

(increases/

decreases)

[ii] Ladakh is a _____ of India. (state/ union territory)

[iii] It takes _____ hours to weave a plain pashmina shawl. (250/ 25)

[iv] Jammu is the _____ capital while Srinagar is the _____ capital of J&K

state

of India.

(summer/ winter)

**[v] Rebo is a big conical tent house made of _____ hair.
(sheep/ yak)**

**[vi] In Srinagar many families live in _____. (a type of house
boat).**

T

**hese houses can be seen in _____ lake and _____ river.
(Jhelum/ dal)**